

What does it mean when something is 2D or Two Dimensional?

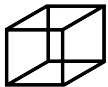
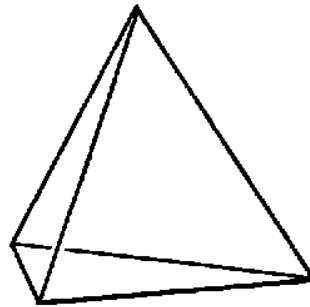
What does it mean when something is 3D or Three Dimensional?

What is a Polygon?

What is a Polyhedron?

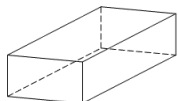
Identify the parts of the geometric shape!

- Color the **face** of the geometric shape red
- Circle the **vertex** of the shape in blue
- Trace an **edge** of the shape in green



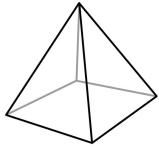
What is a Cube? (write the definition)

- Draw its net!



What is a Cuboid? (write the definition)

- Draw its net!



What is a Pyramid? (write the definition)

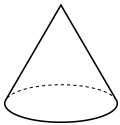
Draw its net!



What is a Prism? (write the definition)




Draw its net! (only draw one)



What is a Cone? (write the definition)

Draw its net!



What is a Cylinder? (write the definition)

Draw its net!